

# 2021 WORKSHEET 4

## NUMERACY YEAR 1

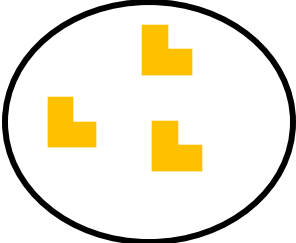
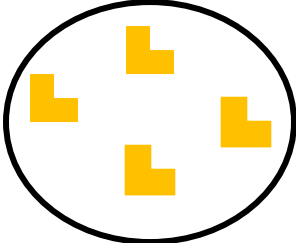

Answer all the questions in the Mathematics Activity book.

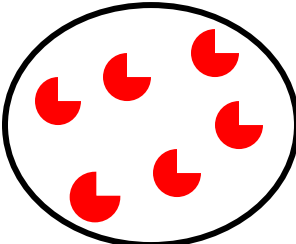
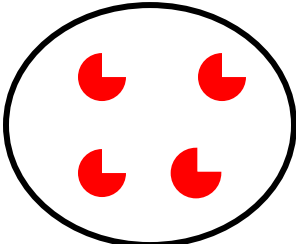

1. Complete the equations by drawing the missing dots.

a.  +  = 6 (1 mark)

b.  +  = 12 (1 mark)

2. Add the objects in the two sets and write the correct answer.

a.  +  =  (1 mark)

b.  +  =  (1 mark)

3. Draw a line longer than the given line in length.



(1 mark)

4. Draw a pencil shorter than the given pencil in length.



(1 mark)

